











Maths

 <p>Cupcakes come in packs of four. At the beginning of the week, the store had 425 packs of cupcakes. At the end of the week, there were 124 packs remaining.</p> <p>How many individual cupcakes were sold?</p> <p>twinkl.com</p>	 <p>There are 12 eggs in each egg tray and I bought 14 trays.</p> <p>I used four trays of eggs this weekend, how many individual eggs do I have left?</p> <p>twinkl.com</p>	 <p>Bags of sugar cost 78p and I bought five.</p> <p>If I paid with a £10 note, how much change did I receive?</p> <p>twinkl.com</p>	 <p>Rosie bought three cakes, each costing £8.45. She paid with £30.00.</p> <p>How much change did she receive?</p> <p>twinkl.com</p>	 <p>Markus bought four spatulas, each costing £1.75. He paid with a £10 note.</p> <p>How much change did he receive?</p> <p>twinkl.com</p>
 <p>Emil has four 700g bags of raisins.</p> <p>If he uses 1574g of raisins, how many grams does he have left?</p> <p>twinkl.com</p>	 <p>Large chocolate cake - £9.75 Medium lemon cake - £8.05 Small Victoria sponge cake - £5.50</p> <p>Four children buy one large chocolate cake and one medium lemon cake, sharing the cost equally.</p> <p>How much do they each pay?</p> <p>twinkl.com</p>	 <p>Large chocolate cake - £9.75 Medium lemon cake - £7.99 Small Victoria sponge cake - £5.50</p> <p>Five children bought two large chocolate cakes and one small Victoria sponge cake, sharing the cost equally.</p> <p>How much did they each pay?</p> <p>twinkl.com</p>	 <p>Large chocolate cake - £9.75 Medium lemon cake - £7.99 Small Victoria sponge cake - £5.50</p> <p>The cake shop runs a 'Happy Hour', where large cakes are sold at $\frac{1}{3}$ off.</p> <p>How much would be saved by buying a large cake in the 'Happy Hour', rather than a medium cake?</p> <p>twinkl.com</p>	 <p>The cake shop target sales are 1600 cakes per week. By Wednesday, Assistant A has sold 535 cakes and assistant B has sold 284.</p> <p>How many more cakes do they have to sell to meet the shop's target?</p> <p>twinkl.com</p>

English

