

Reading-Tuesday

LI: To answer different types of comprehension questions.

RETRIEVE

1. How many balloons did Mr Twit have ready outside?
2. Which of Mrs. Twit's body parts did Mr Twit tie the balloons do?

INFERENCE

"Are you sure my feet are tied properly to the ground?" she gasped

3. How do you think Mrs. Twit was feeling? Why?

PREDICTION

And that's what gave Mr Twit his second nasty idea.

4. What do you think Mr. Twit's second nasty idea is?

Tuesday's English

L1: To use adverbs of manner.

quickly	slowly	hurriedly	gently
carefully	cautiously	anxiously	happily
calmly	quietly	loudly	politely

**Can you rewrite these sentences using adverbs of manner?
See some examples in the table above!**

- 1) I ran to the toilet.
- 2) The scared boy opened the front door.
- 3) I played with my friends
- 4) I put my toys away.
- 5) I spoke to the person next to me.

2) (Optional) Find the adverbs of manner in each of these sentences!

- 1) I asked politely for a cup of tea.
- 2) The teacher told us to line up quietly.
- 3) I excitedly read my new book.
- 4) Slowly, I put my things back in the cupboard.

Maths - Tuesday

L1: To solve problems involving money

Mild

1.

Desi has these coins.




How much does he have altogether?

p

2.

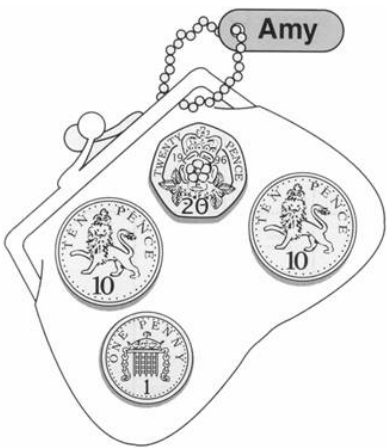
Ella puts these coins in a box.



How much does she put in the box altogether?

p

3. Amy has these coins in her purse.



How much is in Amy's purse?

p

4.

This is the money Tom has.

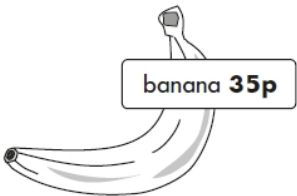


How much money does Tom have?

p

5.

Ella wants to buy one banana.



She has 20p



How much more money does she need?

p

Hot

1.


Sam has 55p.

Ben has 10p less than Sam.

Tick the coins that **Ben** has.



2.



35p

Amy buys **one** pear for 35p.

She pays with a 50p coin.



How much change does Amy get?

 p

3.

Look at these coins:



What is the largest amount you can make using **three** of these coins?

 p

4.

Ben has **90p**.

He buys **2** tickets.



Each ticket costs **35p**.

How much money does Ben have **left**?

5.

Apples cost **10p** each. Pears cost **25p** each.



Amy buys **1** apple and **2** pears.

How much **change** does she get from **£1**?

6.

Kemi has **only two coins** in her purse.



Tick (✓) **all** the amounts **she could have** in her purse.

23p

20p

25p

22p

26p